



































































Name \_\_\_\_\_

Date \_\_\_\_\_

1. How much time has passed?

a. 6:30 a.m. → 7:00 a.m. \_\_\_\_\_

b. 4:00 p.m. → 9:00 p.m. \_\_\_\_\_

c. 11:00 a.m. → 5:00 p.m. \_\_\_\_\_


d. 3:30 a.m. → 10:30 a.m. \_\_\_\_\_

e. 7:00 p.m. → 1:30 a.m. \_\_\_\_\_

f.



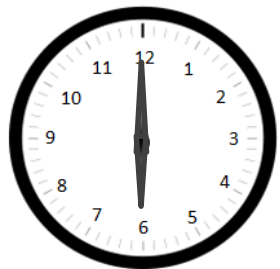
p.m.




a.m.

\_\_\_\_\_

g.



a.m.




p.m.

\_\_\_\_\_

h.



a.m.



a.m.

\_\_\_\_\_

